

Unit 6 Online Stations Review

Name: _____ Class: _____

Directions: Start by clicking on the first page of the Unit 6 Online Stations Review on the math website (starting link will be found under Unit 6).

Station #1 – Angle Vocabulary.

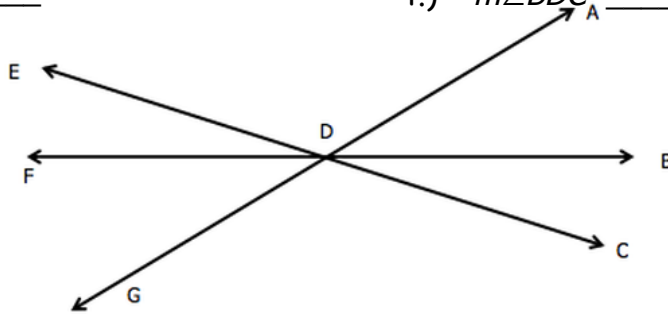
- 1.) _____ 2.) _____ 3.) _____ 4.) _____

Link for station #2: <http://unit6review.weebly.com/>_____

Station #2 – Angle Relationships Part 2

1.) $m\angle EDF =$ _____ 2.) $m\angle ADB$ _____

3.) $m\angle CDG$ _____ 4.) $m\angle BDC$ _____



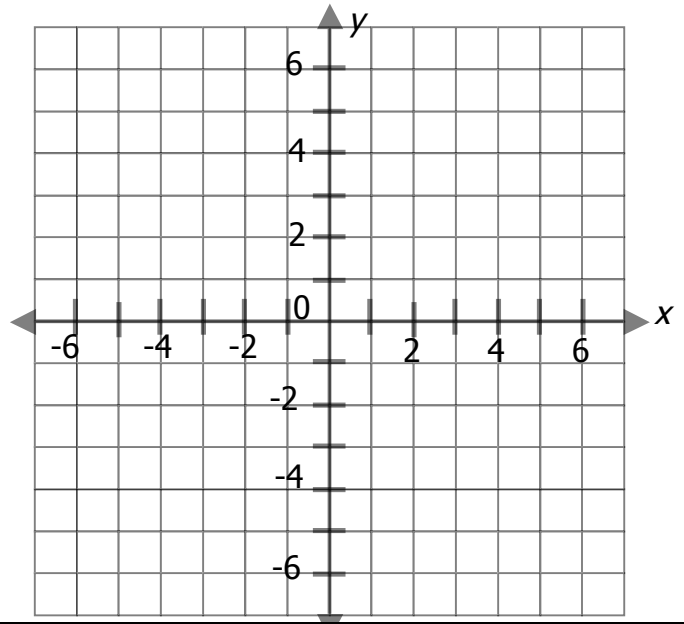
Link for station #3: <http://unit6review.weebly.com/>_____

Station #3 – Translations and Dilations

1.) _____

2.) _____

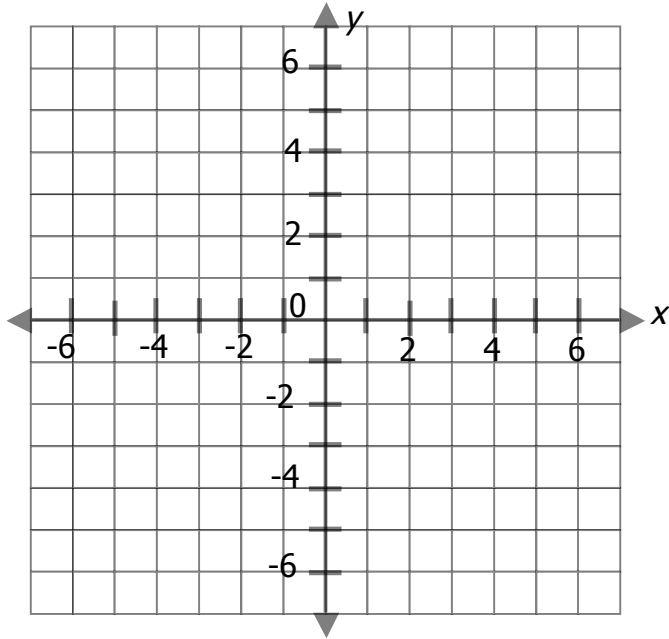
3.) _____



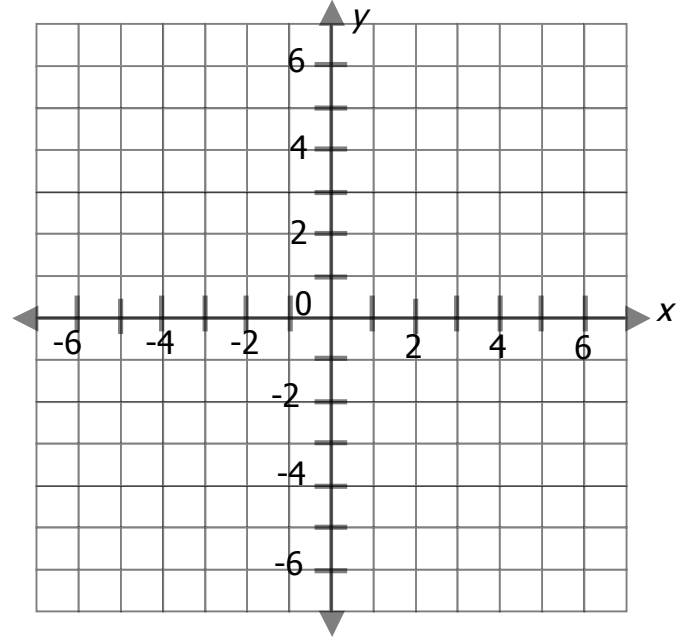
Link for station #4: <http://unit6review.weebly.com/>_____

Station #4 – Reflections and Rotations

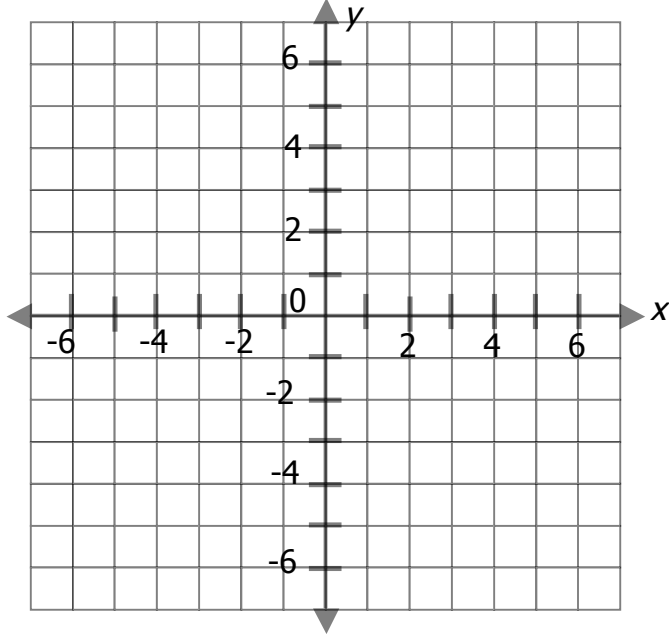
1.) _____



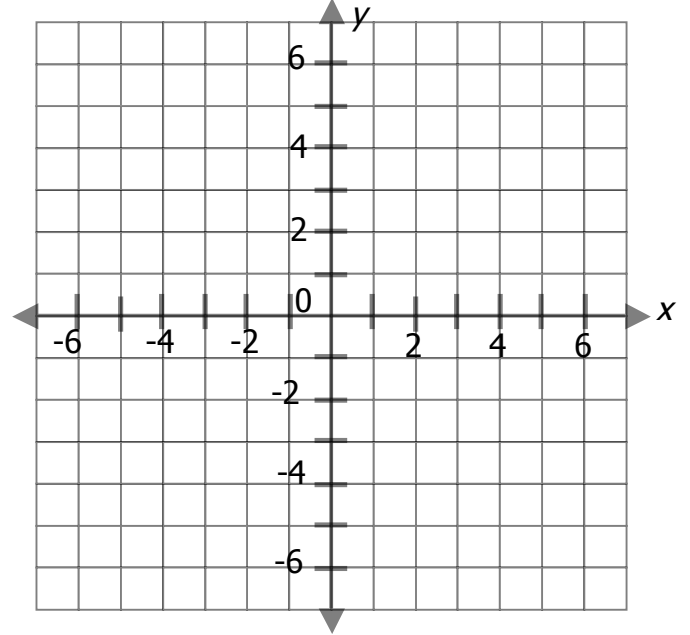
2.) _____



3.) _____



4.) _____



Link for station #4: <http://unit6review.weebly.com/>_____

Station #5 – Similarity vs. Congruence

1.) _____

2.) _____

3.) _____

4.) _____

Link for final page: <http://unit6review.weebly.com/>_____